


Name \_\_\_\_\_

1 Use the array to complete the number sentences.



$$\begin{array}{l} 5 \times 7 = 35 \\ 7 \times 5 = 35 \\ 35 \div 5 = 7 \\ 35 \div 7 = 5 \end{array}$$

1 mark for 3 correct.

2 A shop has 32 apples.  
They are put into 8 equal groups.  
How many apples are in each group?

4 apples

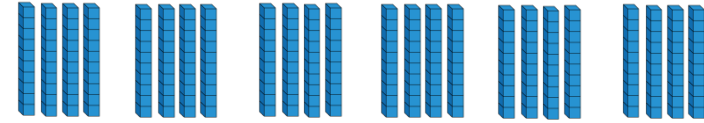
2 marks

1 mark

3 Use the diagrams to help you.



$$6 \times 4 = 24$$



$$6 \times 40 = 240$$

2 marks

4 Complete the calculation.

Tens	Ones

	T	O
	1	3
×		3
	3	9

1 mark

5 There are 4 jars of sweets.  
Each jar has 23 sweets.



How many sweets are there altogether?

	T	O
	2	3
×		4
	9	2

92 sweets

1 mark

- 6 Evie has calculated  $21 \times 4$   
Her answer is 804  
Explain her mistake.

Evie has multiplied 4 by 20  
and put 80 in the wrong  
place. 80 should just be an 8  
in the tens column.

	T	O
	2	1
$\times$		4
8	0	4

- 7 Work out  $37 \times 5$   
185

1 mark for correct method with 1 error.


- 8 Calculate  $96 \div 3 =$

Use the place value grid to help.

Tens	Ones

- Calculate  $84 \div 4 =$

- 9 Amir makes groups of 3 gummy bears.




1 mark

He makes 7 groups and has 2 bears left over.  
How many gummy bears does he have  
altogether?

23 gummy bears

1 mark

- 10 There are 25 green cubes in a box.  
There are 5 times as many blue cubes than  
green cubes in the box.  
How many cubes are there **altogether**?

1 mark for 125 blue cubes.

150 cubes

2 marks

Circle how confident you feel with multiplication & division.

1 mark

1                      2                      3                      4                      5  
Not                      Very  
confident                      confident