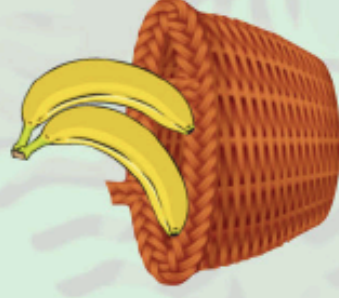
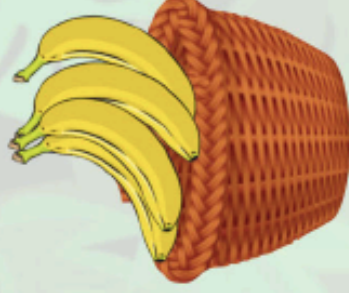



It takes one monkey three minutes to eat one banana.

How many minutes would it take one monkey to eat three bananas?



Can you solve these problems for the monkey family?



How many minutes would it take one monkey to eat all the bananas in the baskets above?

